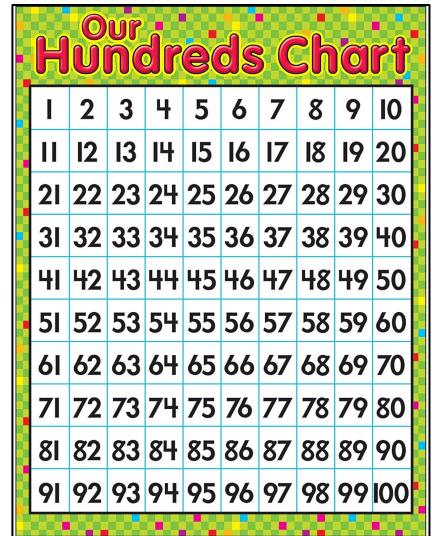


Math - Monday 4/20/2020

1. Count to 100
2. Addition fluency
3. Subtraction fluency
4. EnVision Math Notebook Pages
5. Number writing



Count to 100

Have your child start at 1 and try and count to 100. Write down any numbers missed/skipped, and write down the number they stopped at.

Missed #s: _____
 Stopped at: _____

Initial: _____

Addition Fluency

Set a timer for **1 minute** - Have your child answer as many addition problems as possible in that minute. Review the ones missed after

$4+0=$

$2+3=$

$2+1=$

$1+3=$

$4+1=$

$2+2=$

$3+1=$

$2+0=$

$1+2=$

$5+0=$

$_____/10$

Subtraction Fluency

Set a timer for **1 minute** - Have your child answer as many subtraction problems as possible in that minute. Review the ones missed after.

$3-2=$

$4-1=$

$2-1=$

$4-0=$

$2-2=$

$5-0=$

$3-1=$

$1-1=$

$4-3=$

$5-3=$

$_____/10$

EnVision Math Notebook

Topic 12 - Lesson 5 - Describe and identify solid figures.

- Look around the house for things that are 3d shapes.
Examples: cones, spheres, cubes, etc.

Pgs. 481-484

- Follow directions at the bottom of the pages

Monday - Number Writing

Trace the numbers 1-30 and then write 1-30 (2 times) in the blank boxes!

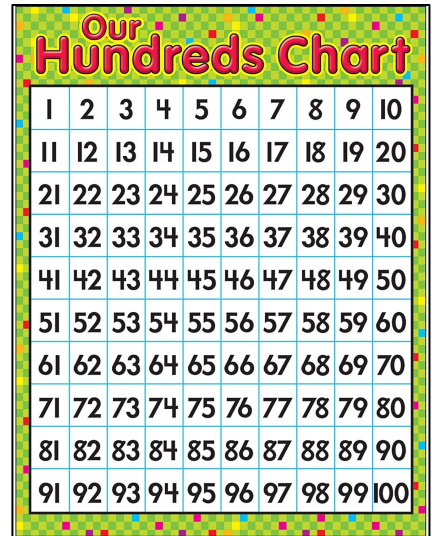
| | | | | | | | | | |
|---|---|---|---|---|---|---|---|---|----|
| 1 | 2 | 3 | 4 | 5 | 6 | 7 | 8 | 9 | 10 |
| 1 | 2 | 3 | 4 | 5 | 6 | 7 | 8 | 9 | 10 |
| | | | | | | | | | |
| | | | | | | | | | |

| | | | | | | | | | |
|----|----|----|----|----|----|----|----|----|----|
| 11 | 12 | 13 | 14 | 15 | 16 | 17 | 18 | 19 | 20 |
| 11 | 12 | 13 | 14 | 15 | 16 | 17 | 18 | 19 | 20 |
| | | | | | | | | | |
| | | | | | | | | | |

| | | | | | | | | | |
|----|----|----|----|----|----|----|----|----|----|
| 21 | 22 | 23 | 24 | 25 | 26 | 27 | 28 | 29 | 30 |
| 21 | 22 | 23 | 24 | 25 | 26 | 27 | 28 | 29 | 30 |
| | | | | | | | | | |
| | | | | | | | | | |

Math - Tuesday 4/21/2020

1. Count to 100
2. Addition fluency
3. Subtraction fluency
4. EnVision Math Notebook Pages
5. Number Writing



Count to 100

Have your child start at 1 and try and count to 100. Write down any numbers missed/skipped, and write down the number they stopped at.

Missed #s: _____
Stopped at: _____

Initial: _____

Addition Fluency

Set a timer for **1 minute** - Have your child answer as many addition problems as possible in that minute. Review the ones missed after

$1+4=$

$2+2=$

$2+1=$

$1+1=$

$0+5=$

$0+1=$

$4+0=$

$2+3=$

$5+0=$

$0+0=$

$_____/10$

Subtraction Fluency

Set a timer for **1 minute** - Have your child answer as many subtraction problems as possible in that minute. Review the ones missed after.

$4-0=$

$3-0=$

$0-0=$

$4-1=$

$3-3=$

$1-0=$

$5-3=$

$4-3=$

$5-5=$

$5-4=$

$_____/10$

EnVision Math Notebook

Topic 12 - Lesson 6 - I can describe shapes in the environment

Pgs. 485-488

- Follow directions at the bottom of the pages.

Tuesday - Number Writing

Trace the numbers 1-30 and then write 1-30 (2 times) in the blank boxes!

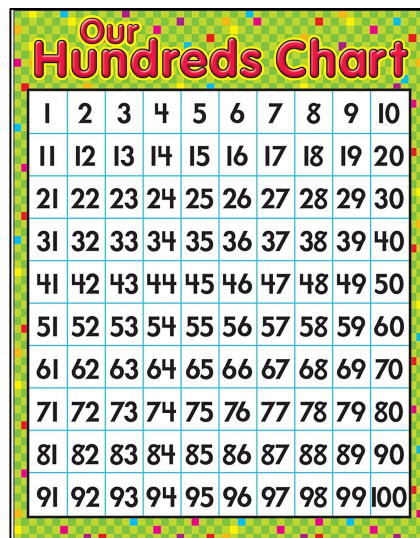
| | | | | | | | | | |
|---|---|---|---|---|---|---|---|---|----|
| 1 | 2 | 3 | 4 | 5 | 6 | 7 | 8 | 9 | 10 |
| 1 | 2 | 3 | 4 | 5 | 6 | 7 | 8 | 9 | 10 |
| | | | | | | | | | |
| | | | | | | | | | |

| | | | | | | | | | |
|----|----|----|----|----|----|----|----|----|----|
| 11 | 12 | 13 | 14 | 15 | 16 | 17 | 18 | 19 | 20 |
| 11 | 12 | 13 | 14 | 15 | 16 | 17 | 18 | 19 | 20 |
| | | | | | | | | | |
| | | | | | | | | | |

| | | | | | | | | | |
|----|----|----|----|----|----|----|----|----|----|
| 21 | 22 | 23 | 24 | 25 | 26 | 27 | 28 | 29 | 30 |
| 21 | 22 | 23 | 24 | 25 | 26 | 27 | 28 | 29 | 30 |
| | | | | | | | | | |
| | | | | | | | | | |

Math - Wednesday 4/22/2020

1. Count to 100
2. Addition fluency
3. Subtraction fluency
4. EnVision Math Notebook Pages
5. Number Writing



Count to 100

Have your child start at 1 and try and count to 100. Write down any numbers missed/skipped, and write down the number they stopped at.

Missed #s: _____
 Stopped at: _____

Initial: _____

Addition Fluency

Set a timer for **1 minute** - Have your child answer as many addition problems as possible in that minute. Review the ones missed after

$3+1=$

$3+0=$

$3+2=$

$0+4=$

$0+2=$

$1+3=$

$1+2=$

$4+1=$

$1+0=$

$2+0=$

$_____/10$

Subtraction Fluency

Set a timer for **1 minute** - Have your child answer as many subtraction problems as possible in that minute. Review the ones missed after.

$5-1=$

$3-1=$

$2-2=$

$2-1=$

$1-1=$

$3-2=$

$5-2=$

$4-4=$

$5-0=$

$4-2=$

$_____/10$

EnVision Math Notebook

Topic 12 - Lesson 7 - Positional Words

Pgs. 489-492

- Follow directions at the bottom of the pages

Wednesday - Number Writing

Trace the numbers 1-30 and then write 1-30 (2 times) in the blank boxes!

| | | | | | | | | | |
|---|---|---|---|---|---|---|---|---|----|
| 1 | 2 | 3 | 4 | 5 | 6 | 7 | 8 | 9 | 10 |
| 1 | 2 | 3 | 4 | 5 | 6 | 7 | 8 | 9 | 10 |
| | | | | | | | | | |
| | | | | | | | | | |

| | | | | | | | | | |
|----|----|----|----|----|----|----|----|----|----|
| 11 | 12 | 13 | 14 | 15 | 16 | 17 | 18 | 19 | 20 |
| 11 | 12 | 13 | 14 | 15 | 16 | 17 | 18 | 19 | 20 |
| | | | | | | | | | |
| | | | | | | | | | |

| | | | | | | | | | |
|----|----|----|----|----|----|----|----|----|----|
| 21 | 22 | 23 | 24 | 25 | 26 | 27 | 28 | 29 | 30 |
| 21 | 22 | 23 | 24 | 25 | 26 | 27 | 28 | 29 | 30 |
| | | | | | | | | | |
| | | | | | | | | | |

Math - Thursday 4/23/2020

1. Count to 100
2. Addition fluency
3. Subtraction fluency
4. EnVision Math Notebook Pages
5. Number Writing



Count to 100

Have your child start at 1 and try and count to 100. Write down any numbers missed/skipped, and write down the number they stopped at.

Missed #s: _____
 Stopped at: _____

Initial: _____

Addition Fluency

Set a timer for **1 minute** - Have your child answer as many addition problems as possible in that minute. Review the ones missed after

$2+3=$

$1+0=$

$0+0=$

$3+0=$

$4+1=$

$2+2=$

$1+3=$

$1+2=$

$3+2=$

$4+0=$

$_____/10$

Subtraction Fluency

Set a timer for **1 minute** - Have your child answer as many subtraction problems as possible in that minute. Review the ones missed after.

$5-5=$

$4-1=$

$5-0=$

$3-0=$

$4-3=$

$5-3=$

$5-1=$

$5-4=$

$1-1=$

$3-3=$

$_____/10$

EnVision Math Notebook

Topic 12 - Fluency practice

Pg. 493

- Follow directions at the bottom of the page

Thursday - Number Writing

Trace the numbers 1-30 and then write 1-30 (2 times) in the blank boxes!

| | | | | | | | | | |
|---|---|---|---|---|---|---|---|---|----|
| 1 | 2 | 3 | 4 | 5 | 6 | 7 | 8 | 9 | 10 |
| 1 | 2 | 3 | 4 | 5 | 6 | 7 | 8 | 9 | 10 |
| | | | | | | | | | |
| | | | | | | | | | |

| | | | | | | | | | |
|----|----|----|----|----|----|----|----|----|----|
| 11 | 12 | 13 | 14 | 15 | 16 | 17 | 18 | 19 | 20 |
| 11 | 12 | 13 | 14 | 15 | 16 | 17 | 18 | 19 | 20 |
| | | | | | | | | | |
| | | | | | | | | | |

| | | | | | | | | | |
|----|----|----|----|----|----|----|----|----|----|
| 21 | 22 | 23 | 24 | 25 | 26 | 27 | 28 | 29 | 30 |
| 21 | 22 | 23 | 24 | 25 | 26 | 27 | 28 | 29 | 30 |
| | | | | | | | | | |
| | | | | | | | | | |

Math - Friday 4/24/2020

1. Count to 100
2. Addition fluency
3. Subtraction fluency
4. EnVision Math Notebook Pages
5. Number Writing

Our Hundreds Chart

| | | | | | | | | | |
|----|----|----|----|----|----|----|----|----|-----|
| 1 | 2 | 3 | 4 | 5 | 6 | 7 | 8 | 9 | 10 |
| 11 | 12 | 13 | 14 | 15 | 16 | 17 | 18 | 19 | 20 |
| 21 | 22 | 23 | 24 | 25 | 26 | 27 | 28 | 29 | 30 |
| 31 | 32 | 33 | 34 | 35 | 36 | 37 | 38 | 39 | 40 |
| 41 | 42 | 43 | 44 | 45 | 46 | 47 | 48 | 49 | 50 |
| 51 | 52 | 53 | 54 | 55 | 56 | 57 | 58 | 59 | 60 |
| 61 | 62 | 63 | 64 | 65 | 66 | 67 | 68 | 69 | 70 |
| 71 | 72 | 73 | 74 | 75 | 76 | 77 | 78 | 79 | 80 |
| 81 | 82 | 83 | 84 | 85 | 86 | 87 | 88 | 89 | 90 |
| 91 | 92 | 93 | 94 | 95 | 96 | 97 | 98 | 99 | 100 |

Count to 100

Have your child start at 1 and try and count to 100. Write down any numbers missed/skipped, and write down the number they stopped at.

Missed #s: _____
 Stopped at: _____

Initial: _____

Addition Fluency

Set a timer for **1 minute** - Have your child answer as many addition problems as possible in that minute.
 Review the ones missed after

$0+1=$

$1+4=$

$0+2=$

$0+1=$

$2+1=$

$2+0=$

$5+0=$

$0+5=$

$0+4=$

$3+1=$

$_____/10$

Subtraction Fluency

Set a timer for **1 minute** - Have your child answer as many subtraction problems as possible in that minute.
 Review the ones missed after.

$3-2=$

$4-1=$

$2-1=$

$4-0=$

$2-2=$

$5-0=$

$3-1=$

$1-1=$

$4-3=$

$5-3=$

$_____/10$

EnVision Math Notebook

Review

Double check your work

Friday - Number Writing

Trace the numbers 1-30 and then write 1-30 (2 times) in the blank boxes!

| | | | | | | | | | |
|---|---|---|---|---|---|---|---|---|----|
| 1 | 2 | 3 | 4 | 5 | 6 | 7 | 8 | 9 | 10 |
| 1 | 2 | 3 | 4 | 5 | 6 | 7 | 8 | 9 | 10 |
| | | | | | | | | | |
| | | | | | | | | | |

| | | | | | | | | | |
|----|----|----|----|----|----|----|----|----|----|
| 11 | 12 | 13 | 14 | 15 | 16 | 17 | 18 | 19 | 20 |
| 11 | 12 | 13 | 14 | 15 | 16 | 17 | 18 | 19 | 20 |
| | | | | | | | | | |
| | | | | | | | | | |

| | | | | | | | | | |
|----|----|----|----|----|----|----|----|----|----|
| 21 | 22 | 23 | 24 | 25 | 26 | 27 | 28 | 29 | 30 |
| 21 | 22 | 23 | 24 | 25 | 26 | 27 | 28 | 29 | 30 |
| | | | | | | | | | |
| | | | | | | | | | |